



Scientific Method Test

Test your knowledge of the scientific method by answering these questions.

What are some questions you could answer with the help of the scientific method?

What do you think a hypothesis is?

How do you determine whether your hypothesis is correct or not?

What is the last step in the scientific method and why is it so important?



Toppings
Class: Science
1st, 2nd, 3rd

Name: _____

Water Cycle Vocabulary

Directions: Write the letter next to the correct definition.


1. _____ Falls to the Earth in the form of rain, snow, sleet, hail
 2. _____ provides heat, light and energy
 3. _____ Forms droplets of water as water vapors cool to liquid form
 4. _____ process where the sun's heat turns liquid into gas (water vapor)
 5. _____ water such as lakes, rivers, ponds, and streams
 6. _____ process where water moves from the ground, to the sky and back to the ground again
 7. _____ gas formed when water evaporates
- A. Water cycle
B. Condensation
C. Precipitation
D. Water vapor
E. Surface water
F. Sun
G. Evaporation

Plants & Animals & Food Chains oh My!

Name: _____

Place the objects in order of how the energy flows, starting with the sun.

1.	2.	3.	4.	5.
----	----	----	----	----

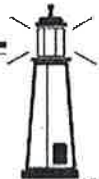


Toppings
Class: Social Studies
4th, 5th/_{6th}, 7th

About The EAST REGION

Landforms of the Northeast

Water of the Northeast



Midwest Region

Place I'd Like to Visit





Interesting Fact about the Midwest

Map of the Region

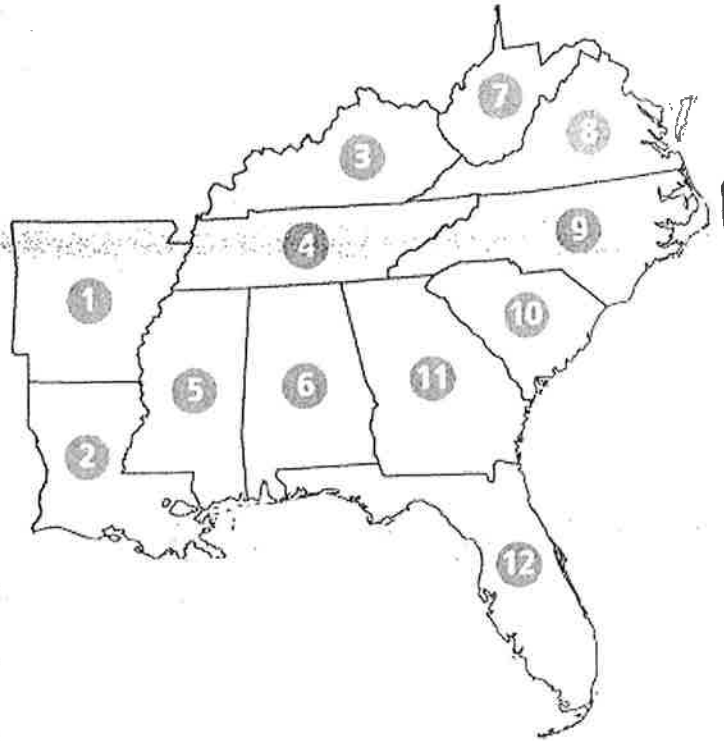
There are _____ states in the Midwest region.



Name _____

Southeast Region Study Guide

Practice labeling the states
on the map. You will need to
do this for the test!



1. _____
2. _____
3. _____
4. _____
5. _____
6. _____
7. _____
8. _____
9. _____
10. _____
11. _____
12. _____

- Alabama
- Arkansas
- Florida
- Georgia
- Kentucky
- Louisiana
- Mississippi
- North Carolina
- South Carolina
- Tennessee
- Virginia
- West Virginia